

Kestrels Home Learning Friday 1<sup>st</sup> May  
Weekly tasks to do when possible:

**Grammar:** informal vs formal language. Write some sentences like the queen and then translate them into informal language/ slang.

**Spelling:** Practise writing words with the suffixes -able, -ible, -ably and -ibly and then cover them and rewrite them. The rule is included in this PowerPoint.

**Arithmetic:** Practise the four operations with decimals. (Remember place value!)  
Please make sure you are reading daily, for at least 20 minutes.

**Japan Activities for the week!**

I have suggested some activities below which are suitable for a Year 5/6 class but can also be done by younger children with some help.

Choose the activities you would most like to do and present them creatively! You can present your work however you like, for example, in the form of artwork, a scrapbook, a PowerPoint.

**Our weekly focus for this week is Festivals.**

**Please see the next slide for the activities.**



### **Suggested afternoon activities for the week:**

- Research different Japanese festivals! Find out where they happen and why.
- Find a festival which interests you (some are listed below) and study the history of it. Is there a traditional story behind the celebration? Is it similar to any festivals we have in the UK?
- Consider the religions of Japan. What are the main religions? Do they celebrate the same things that we do?
- Lots of festivals have traditional songs. Can you find any and have a listen? Do you enjoy them? How is the music made? Does it sound like music we have at our festivals in the UK? Why/why not?
- You could look up some of the foods associated with the festivals and try to recreate them.

#### Hanami festival- the festival of Cherry/plum blossom:

Create some traditional paper lanterns and decorate them.

Paint a cherry/ plum blossom tree.

Research the festival and find out extra information.

#### Hina Matsuri- the doll festival/ peach blossom festival:

Draw your own doll and create a suitable outfit for them.

Find out more about why there is a festival about dolls and what they represent.

Create an idea for your own doll festival. Would the dolls look the same? Would they have different outfits? What would they represent?

#### Tango no Sekku- the boys' festival/ children's day:

What makes a good warrior in Japanese culture?

Create your own Carp windsock to put up in your garden.

Paint/draw a decorative carp picture.

Find out what the carp represents in Japanese culture.

#### Tanabata- the star festival:

Do some star gazing and create your own story about a constellation.


Find out about the story behind this festival.

Write your wishes on strips of paper and decorate a tree with them.

#### Shichi go san- the festival of 7-5-3:

Research the lucky numbers in Japan. Why are they so lucky? Do you have a lucky number? Why?

Research the history of the festival and see how it is celebrated.



# Spelling Rule Explanation

The 'able' and 'ible' endings are usually used to form **adjectives** from **nouns**. The suffix 'able' is usually used after a stem that is a complete word in itself.

The suffixes 'ably' and 'ibly' are used to form **adverbs**.

reasonable    suitably    valuable

terribly    possible    edibly


**NOTE:** If the root word ends in 'e', this is usually dropped when 'able' is added.

## Kestrels - Friday 1<sup>st</sup> May 2020

Maths- To create a simple budget.



English- P4C!



## Maths

L.O: To create a simple budget.

With lots of time at home, you may have found yourselves doing some cooking or baking of nice things! Imagine you and your family are making pizzas tonight. An adult could always give you an imaginary budget, can you make a list of things you would need and, with the help of an adult, you could use an online grocery site to find some prices for your shopping list- can you stick to the budget?

If not, you could help an adult with finding some prices of ingredients of meals they may be making next week, can you help them stick to a budget for their shopping list?









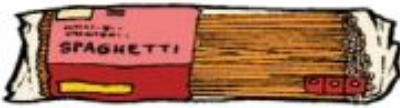

Giving yourself a budget is a great way to save money and make sure you do not spend more than you need to!

If you would like a challenge then I have included some budget sheets on the next few slides for you to compare different supermarkets. There is a silver and gold challenge to choose from.





SILVER CHALLENGE

<p>Baked Beans (4 x 410g)</p> 	<p>Mixed Weight Eggs (6)</p> 	<p>Bananas (4)</p> 	<p>Packet of Biscuits (400G)</p> 	<p>Bag of Sugar (2kg)</p> 
<p>Savewell £2.49 Cutcosts £2.52 Spendless £2.47 Lowcost £2.48 Thrifty's £2.50</p>	<p>Savewell £1.12 Cutcosts £1.05 Spendless £1.14 Lowcost £1.09 Thrifty's £1.10</p>	<p>Savewell £2.19 Cutcosts £2.21 Spendless £2.18 Lowcost £2.17 Thrifty's £2.20</p>	<p>Savewell £3.04 Cutcosts £2.99 Spendless £2.95 Lowcost £3.00 Thrifty's £2.98</p>	<p>Savewell £1.08 Cutcosts £1.11 Spendless £1.09 Lowcost £1.10 Thrifty's £1.08</p>
<p>Bag of Red Apples (6)</p> 	<p>Nacho Crisps (6 x 25g)</p> 	<p>Baguette (400g)</p> 	<p>Spaghetti (500g)</p> 	<p>Orange Juice (6 x 200ml)</p> 
<p>Savewell £1.38 Cutcosts £1.43 Spendless £1.41 Lowcost £1.42 Thrifty's £1.39</p>	<p>Savewell £1.76 Cutcosts £1.78 Spendless £1.81 Lowcost £1.79 Thrifty's £1.80</p>	<p>Savewell £1.32 Cutcosts £1.30 Spendless £1.31 Lowcost £1.34 Thrifty's £1.33</p>	<p>Savewell £1.61 Cutcosts £1.57 Spendless £1.58 Lowcost £1.60 Thrifty's £1.59</p>	<p>Savewell £2.02 Cutcosts £2.04 Spendless £2.03 Lowcost £2.05 Thrifty's £2.06</p>

### Shopping on a Budget

The family are on a tight budget. You have been given the task of shopping for the food items below. You need to spend as little money as possible. Calculate how much the shopping will cost at each store.

<u>Shopping List</u>	<u>Savewell</u>	<u>Cutcosts</u>	<u>Spendless</u>	<u>Lowcost</u>	<u>Thrifty's</u>
2 multipacks of beans	_____	_____	_____	_____	_____
2 boxes of eggs	_____	_____	_____	_____	_____
2 bags of bananas	_____	_____	_____	_____	_____
3 packets of biscuits	_____	_____	_____	_____	_____
2 bags of sugar	_____	_____	_____	_____	_____
2 bags of apples	_____	_____	_____	_____	_____
4 multipacks of crisps	_____	_____	_____	_____	_____
3 baguettes	_____	_____	_____	_____	_____
4 packets of spaghetti	_____	_____	_____	_____	_____
3 multipacks of juice	_____	_____	_____	_____	_____
<b>Total Cost</b>	_____	_____	_____	_____	_____

At which store can you buy your items for the LEAST amount of money? \_\_\_\_\_

At which store can you buy your items for the MOST amount of money? \_\_\_\_\_

What is the difference in cost between these two stores? \_\_\_\_\_

If you shop at Cutcosts, how much change would you get back from £50? \_\_\_\_\_

How much would ONE 200ml bottle of orange juice cost at Cutcosts? \_\_\_\_\_

How much would ONE banana cost at Thrifty's? \_\_\_\_\_

If a packet of biscuits and a bag of sugar costs £4.06 altogether, which store did you buy them from? \_\_\_\_\_











You buy 2 bags of apples and a baguette from Cutcosts and pay with a £5 note. Is it correct to expect 82p change? \_\_\_\_\_

SILVER  
CHALLENGE





**GOLD CHALLENGE**

<b>Baked Beans (4 x 410g)</b> 		<b>Mixed Weight Eggs (6)</b> 		<b>Bananas (4)</b> 		<b>Packet of Biscuits (400G)</b> 		<b>Bag of Sugar (3kg)</b> 	
Savewell	£3.24	Savewell	£1.29	Savewell	£2.50	Savewell	£2.62	Savewell (5% off price!)	£2.20
Cutcosts	£3.20	Cutcosts	£1.25	Cutcosts (Buy one, get one half price!)	£2.48	Cutcosts	£2.66	Cutcosts	£2.25
Spendless	£3.19	Spendless	£1.27	Spendless	£2.52	Spendless (Buy one, get one half price!)	£2.64	Spendless	£2.21
Lowcost	£3.26	Lowcost	£1.24	Lowcost	£2.49	Lowcost	£2.68	Lowcost	£2.28
Thrifty's	£3.15	Thrifty's (15% off price!)	£1.40	Thrifty's	£2.51	Thrifty's	£2.70	Thrifty's	£2.30
<b>Bag of Red Apples (6)</b> 		<b>Nacho Crisps (6 x 25g)</b> 		<b>Baguette (400g)</b> 		<b>Spaghetti (500g)</b> 		<b>Orange Juice (6 x 200ml)</b> 	
Savewell	£1.36	Savewell	£2.73	Savewell	£1.06	Savewell	£2.90	Savewell	£2.20
Cutcosts	£1.35	Cutcosts	£2.71	Cutcosts	£1.10	Cutcosts	£2.86	Cutcosts (25% off price!)	£2.28
Spendless (Buy one, get one free!)	£1.40	Spendless	£2.79	Spendless (Buy one, get one free!)	£1.08	Spendless	£2.91	Spendless	£2.24
Lowcost	£1.38	Lowcost (30% off price!)	£2.80	Lowcost	£1.12	Lowcost	£2.89	Lowcost	£2.22
Thrifty's	£1.37	Thrifty's	£2.75	Thrifty's	£1.15	Thrifty's	£2.79	Thrifty's	£2.26



### Shopping on a Budget

The family are on a tight budget. You have been given the task of shopping for the food items below. You need to spend as little money as possible. Calculate how much the shopping will cost at each store.

**GOLD CHALLENGE**

Shopping List	Savewell	Cutcosts	Spendless	Lowcost	Thrifty's
2 multipacks of beans	_____	_____	_____	_____	_____
1 box of eggs	_____	_____	_____	_____	_____
2 bags of bananas	_____	_____	_____	_____	_____
2 packets of biscuits	_____	_____	_____	_____	_____
1 bag of sugar	_____	_____	_____	_____	_____
2 bags of apples	_____	_____	_____	_____	_____
1 multipack of crisps	_____	_____	_____	_____	_____
4 baguettes	_____	_____	_____	_____	_____
3 packets of spaghetti	_____	_____	_____	_____	_____
2 multipacks of juice	_____	_____	_____	_____	_____
<b>Total Cost</b>	_____	_____	_____	_____	_____

At which store can you buy your items for the **LEAST** amount of money? \_\_\_\_\_

At which store can you buy your items for the **MOST** amount of money? \_\_\_\_\_

What is the difference in cost between these two stores? \_\_\_\_\_

How much does sugar cost per kg if bought from Cutcosts? \_\_\_\_\_

What is the mean cost of spaghetti? \_\_\_\_\_

If a bag of bananas, a packet of biscuits and a bag of sugar costs £7.51, which store did you buy them from? \_\_\_\_\_

If you bought 6 packets of spaghetti from Savewell, how much would it cost if you were given 15% off the total cost? \_\_\_\_\_

You buy 3 boxes of eggs and 2 bags of bananas from Lowcost and pay with £10. Is it correct to expect £1.29 change? \_\_\_\_\_

## English

L.O: To have a P4C discussion about letter writing.

P4C question to discuss:

Is letter writing a lost art or should we stop writing letters?



Write a persuasive paragraph after your discussion to persuade me of your position!