

Reception



When measuring you do not always have to use a ruler. Can you find objects at home that you could use to measure with. For example how many pieces of spaghetti long is your sofa? How many books long is your car?



Can you draw a picture and write about something that you enjoyed doing while on half term? Maybe you enjoyed playing in the garden or baking a cake? I would love to hear what you have been doing.



Digestion

Can you discover what happens to food once we put it in our mouth?




Phonics; Today we are revising the sound 'oa' as in goat.

Name _____		stage	
oa like in		 soap	
 goat	 toad	 boat	 coat

Can you write a sentence using one of the 'oa' sound words?

Words with oa

Directions: Read each sentence. Fill in the blanks with a word from the word box.



- Cars drive on the _____.
- She got _____ when she jumped in the swimming pool.
- I put on my _____ when I go outside.
- I had _____ with jelly on it.
- The surfer got on his surf _____.
- Always use _____ when you wash your hands.

Word Bank

soaked	soap	coat
toast	board	road

Remember to use capital letters, finger spaces and full stops.



Full Stops

A A

Remember to read everyday.



Can you practise forming all of the single sounds as neatly as you can.



Can you make five new words by adding **-ful** to the end of the root word shown in each picture? Click the pictures.



helpful



colourful



restful



watchful



mouthful



Which of these words is **not** an adjective?
Can you write a sentence using two of the new words?

How many adjectives ending in **-ful** can you think of and write down to describe this picture in one minute?



Time's
up!

start

Mental Arithmetic

1. There are nine cookies on a plate. Five are eaten. How many are left?

2. I buy four muffins. Then I buy nine more. How many do I have altogether? _____

3. Colour in the even numbers.

1	2	3	4	5	6	7	8	9	10
11	12	13	14	15	16	17	18	19	20

4. Think of a number which is smaller than 19 and bigger than 14.

5. Add 5 and 8. _____

6. What is the difference between 16 and 21? _____

7. $11 + 7 =$ _____

8. $17 - 8 =$ _____


9. $3 \times 5 =$ _____

10. Name the shapes.



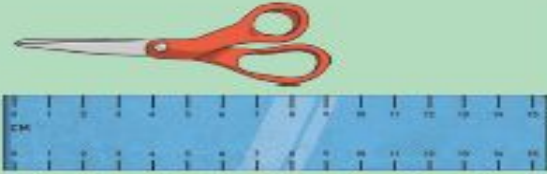




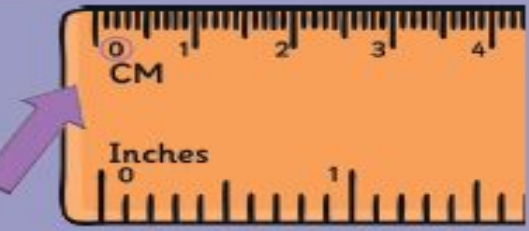


Can you create your own poster with helpful hints on using a ruler correctly?

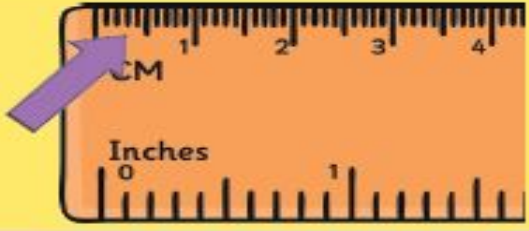
How to Use a Ruler




1. Place the 0cm mark on the ruler at one end of the object you are measuring. Make sure you are using the centimetre scale. Do not measure from the end of the ruler.




2. To find the length of the object to the nearest centimetre, round the length up or down to the nearest number on the ruler.



3. Count the number of intervals after the whole centimetre to find the length of the object to the nearest millimetre. Remember: 10mm = 1cm.



4. Write down the length of the object in either centimetres or millimetres.

 www.twinkl.com.au

Can you remember -
How many millimetres there are in a centimetre?
How many centimetres in a metre?

Can you have a go at some of these challenges?

Measuring Length

How long is a stick of spaghetti? Is it the same length after it has been cooked?



Measuring Length

Measure how tall you are and mark your height with masking tape on the floor. Place objects side by side next to your height. Can you find a combination of objects that measures the same length as your height?




Measuring Length

How long is a £5 note?
Are all notes the same size?



Measuring Length

How many things can you find which measure exactly 15 cm?



Our Body – The Digestive systems

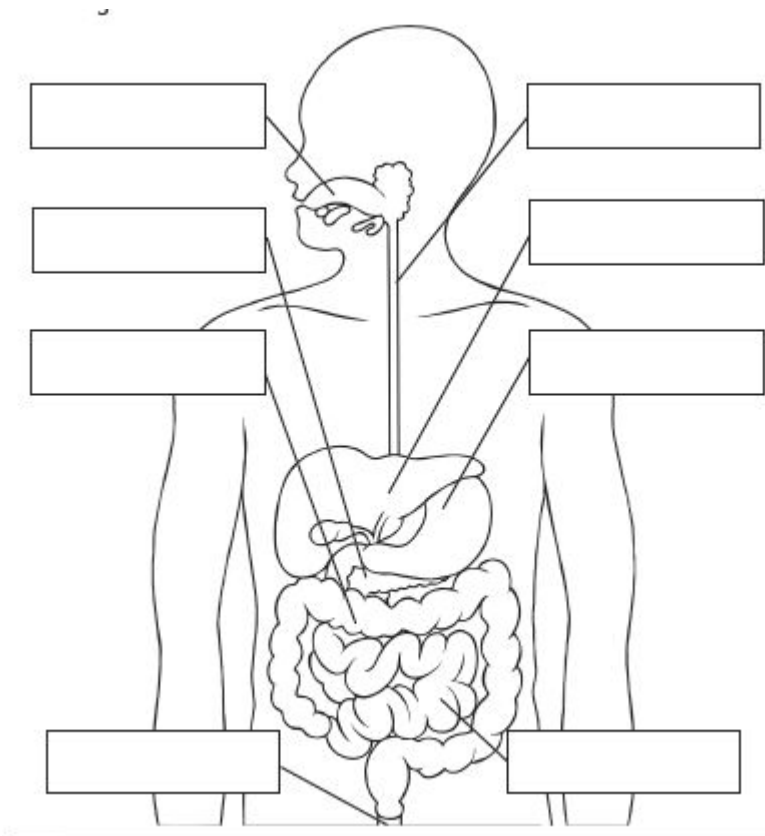


<https://www.bbc.co.uk/bitesize/topics/zf339j6/articles/zrm48mn>

Using this link you can create your own model of the digestive system!

Suggested activities

Can you map the journey your food makes from your mouth through your body?



Can you name and label the parts of the digestive system?

https://www.ducksters.com/science/digestive_system.php